

1. Work out $64 + 28$
(1 mark)2. Work out $119 - 45$
(1 mark)3. Work out 6×37
(1 mark)4. Work out $124 \div 4$
(1 mark)

5. Round 419 to the nearest 100

.....
(1 mark)6. Work out $-3 + 9$
(1 mark)7. What is $\frac{1}{3}$ of 12.....
(1 mark)

8. Find 10% of 150

.....
(1 mark)9. Convert $\frac{1}{4}$ to a decimal.....
(1 mark)10. Calculate 10^2
(1 mark)

11. Write down the next two numbers

1, 4, 7, 10,,

(1 mark)

12. Simplify

 $\frac{2}{10}$
(1 mark)

Name : Class..... Score.....

13. Simplify $3a + a + a$

 (1 mark)

14. Simplify $7 \times k$


 (1 mark)

15. Expand $3(a + 6)$


 (2 marks)

16. Write down all the factors of 9

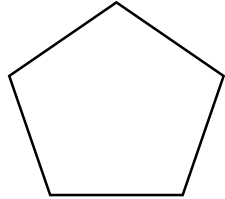
 (1 mark)

17. Calculate the perimeter


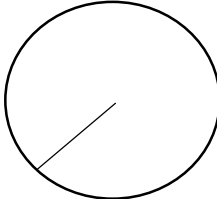
 (1 mark)

18. Calculate the area



 (1 mark)

19. Name this shape


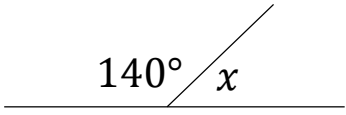
 (1 mark)

20. Name this part of a circle


 (1 mark)

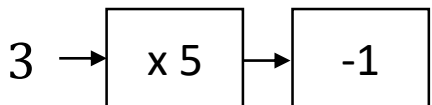
21. Draw all the lines of symmetry


 (1 mark)

22. Calculate x

 $x = \dots\dots\dots$
 (1 mark)

23. Workout
 $5 + 3 \times 3$

 (1 mark)

24. Solve


 (1 mark)